

Key Learning: Subtract numbers within 20

Context: Using dienes

Work completed: independently

small group support

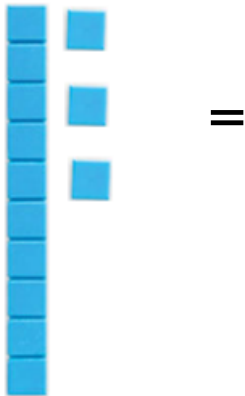
1:1

Task 1:

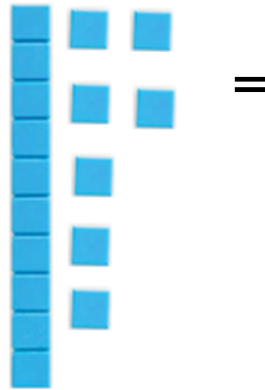
Independent

Use the pictures to help you solve these equations.

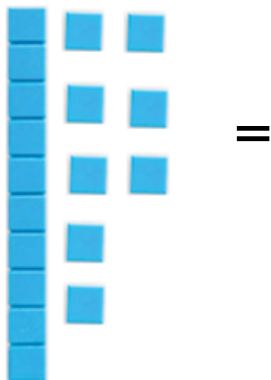
$13 - 2 =$



$17 - 7 =$



$18 - 6 =$



$15 - 0 =$



Task 2: Complete the numbers in the equation and then use the dienes to find the total.

$$\square - \square = \square$$

$$\square - \square = \square$$

$$\square - \square = \square$$

$$\square - \square = \square$$

$$\square - \square = \square$$

$$\square - \square = \square$$